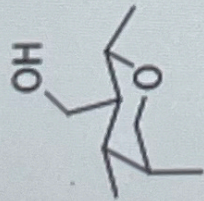


Question 2 (1 point) ✓ Saved

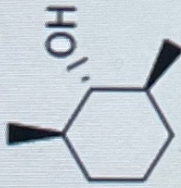
Which of the molecules below CANNOT be prepared using hydroboration/oxidation?



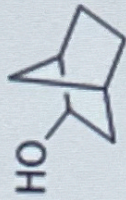
a)



b)



c)



d)

☐ A

☒ B

☐ C

☐ D